

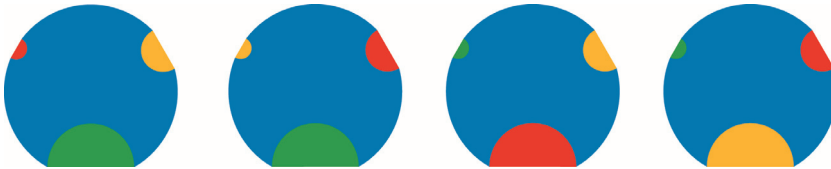


School:
 Name of Student:
 Sets: circle
 Further tools: paper, coloured pencil
 Date:

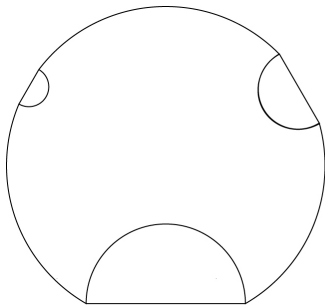
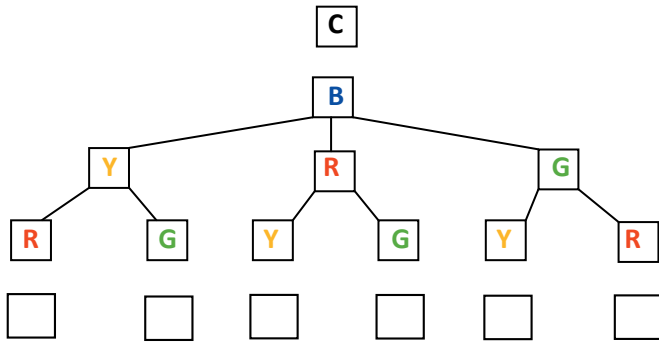
STUDENT
 PUSE Task Number
A
403

Description of the task:

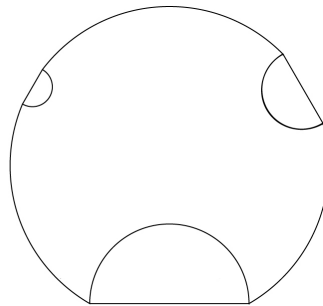
There are 6 circles with blue base colour in the set. Two of them are missing. Can you find them?
 Draw them and indicate their codes.



Solution(s) of the task:



Code: _____



Code: _____

Remarks / Self-evaluation: